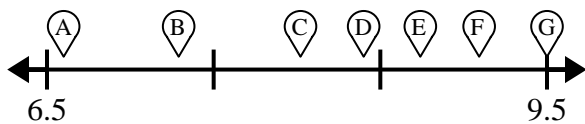




Use the numberline to match the amount to a letter.

Answers

1)



- A) 9.093 _____
- B) 8.021 _____
- C) 6.6 _____

1. _____

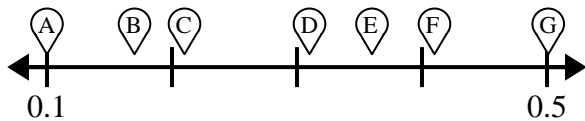
2. _____

3. _____

4. _____

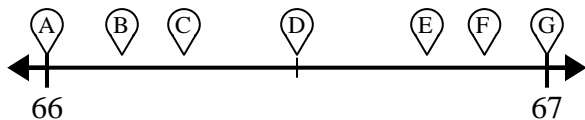
5. _____

2)



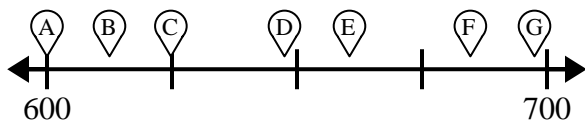
- A) 0.501 _____
- B) 0.36 _____
- C) 0.41 _____

3)



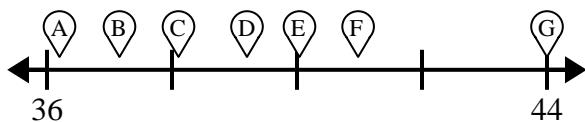
- A) 66.15 _____
- B) 66.875 _____
- C) 66.274 _____

4)



- A) 660.44 _____
- B) 684.677 _____
- C) 624.781 _____

5)

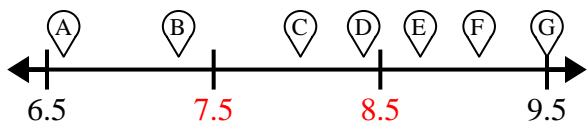


- A) 40.03 _____
- B) 43.9 _____
- C) 37.15 _____



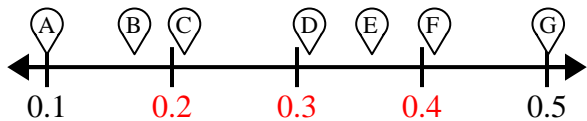
Use the numberline to match the amount to a letter.

1)



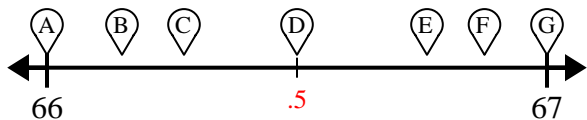
- A) 9.093 F
- B) 8.021 C
- C) 6.6 A

2)



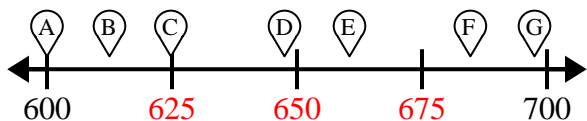
- A) 0.501 G
- B) 0.36 E
- C) 0.41 F

3)



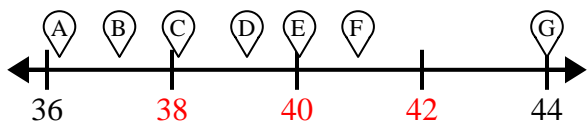
- A) 66.15 B
- B) 66.875 F
- C) 66.274 C

4)



- A) 660.44 E
- B) 684.677 F
- C) 624.781 C

5)



- A) 40.03 E
- B) 43.9 G
- C) 37.15 B

Answers

- 1. F C A
- 2. G E F
- 3. B F C
- 4. E F C
- 5. E G B

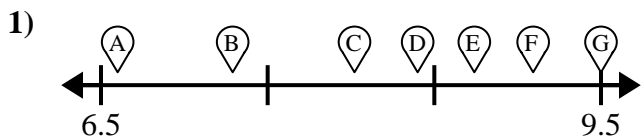


Use the numberline to match the amount to a letter.

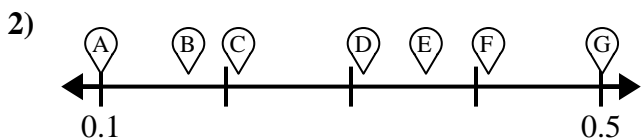
Answers

E	B	C	A
E	C	E	G
F	B	F	F
C	G	F	

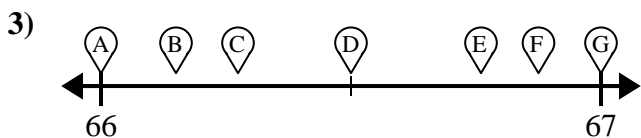
1. _____
2. _____
3. _____
4. _____
5. _____



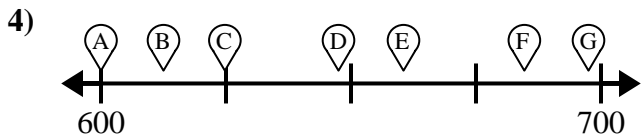
- A) 9.093 _____
- B) 8.021 _____
- C) 6.6 _____



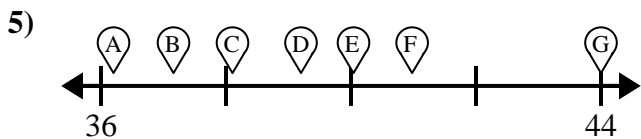
- A) 0.501 _____
- B) 0.36 _____
- C) 0.41 _____



- A) 66.15 _____
- B) 66.875 _____
- C) 66.274 _____



- A) 660.44 _____
- B) 684.677 _____
- C) 624.781 _____



- A) 40.03 _____
- B) 43.9 _____
- C) 37.15 _____